

Solution to Theoretical Question 1

A Swing with a Falling Weight

Part A

- (a) Since the length of the string $L = s + R\theta$ is constant, its rate of change must be zero. Hence we have

$$\dot{s} + R\dot{\theta} = 0 \quad (\text{A1})$$

- (b) Relative to O , Q moves on a circle of radius R with angular velocity $\dot{\theta}$, so

$$\vec{v}_Q = R\dot{\theta}\hat{t} = -\dot{s}\hat{t} \quad (\text{A2})$$

- (c) Refer to Fig. A1. Relative to Q , the displacement of P in a time interval Δt is $\Delta\vec{r}' = (s\Delta\theta)(-\hat{r}) + (\Delta s)\hat{t} = [(s\dot{\theta})(-\hat{r}) + \dot{s}\hat{t}]\Delta t$. It follows

$$\vec{v}' = -s\dot{\theta}\hat{r} + \dot{s}\hat{t} \quad (\text{A3})$$

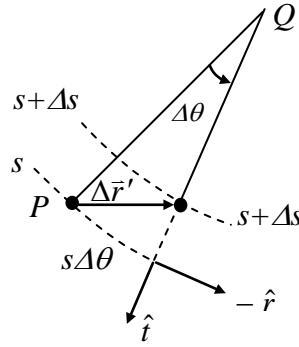


Figure A1

- (d) The velocity of the particle relative to O is the sum of the two relative velocities given in Eqs. (A2) and (A3) so that

$$\vec{v} = \vec{v}' + \vec{v}_Q = (-s\dot{\theta}\hat{r} + \dot{s}\hat{t}) + R\dot{\theta}\hat{t} = -s\dot{\theta}\hat{r} \quad (\text{A4})$$

- (e) Refer to Fig. A2. The $(-\hat{t})$ -component of the velocity change $\Delta\vec{v}$ is given by $(-\hat{t}) \cdot \Delta\vec{v} = v\Delta\theta = v\dot{\theta}\Delta t$. Therefore, the \hat{t} -component of the acceleration $\vec{a} = \Delta\vec{v}/\Delta t$ is given by $\hat{t} \cdot \vec{a} = -v\dot{\theta}$. Since the speed v of the particle is $s\dot{\theta}$ according to Eq. (A4), we see that the \hat{t} -component of the particle's acceleration at P is given by

$$\vec{a} \cdot \hat{t} = -v\dot{\theta} = -(s\dot{\theta})\dot{\theta} = -s\dot{\theta}^2 \quad (\text{A5})$$

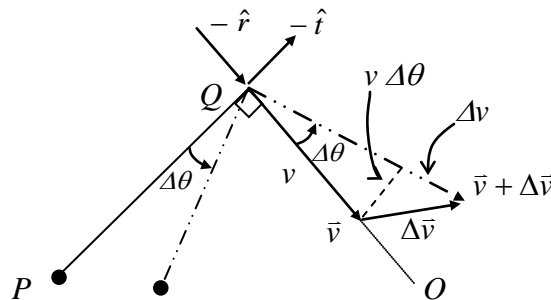


Figure A2

Note that, from Fig. A2, the radial component of the acceleration may also be obtained as

$$\bar{a} \cdot \hat{r} = -dv/dt = -d(s\dot{\theta})/dt.$$

- (f) Refer to Fig. A3. The gravitational potential energy of the particle is given by $U = -mgh$. It may be expressed in terms of s and θ as

$$U(\theta) = -mg[R(1 - \cos \theta) + s \sin \theta] \quad (\text{A6})$$

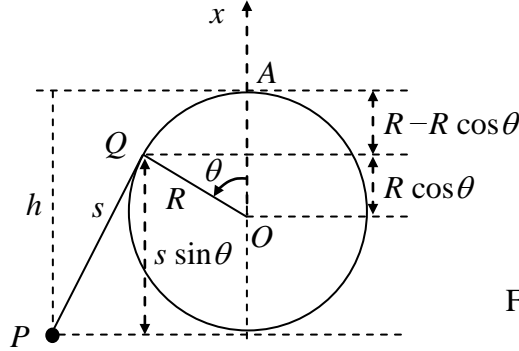


Figure A3

- (g) At the lowest point of its trajectory, the particle's gravitational potential energy U must assume its minimum value U_m . By differentiating Eq. (A6) with respect to θ and using Eq. (A1), the angle θ_m corresponding to the minimum gravitational energy can be obtained.

$$\begin{aligned} \frac{dU}{d\theta} &= -mg \left(R \sin \theta + \frac{ds}{d\theta} \sin \theta + s \cos \theta \right) \\ &= -mg [R \sin \theta + (-R) \sin \theta + s \cos \theta] \\ &= -mgs \cos \theta \end{aligned}$$

At $\theta = \theta_m$, $\left. \frac{dU}{d\theta} \right|_{\theta_m} = 0$. We have $\theta_m = \frac{\pi}{2}$. The lowest point of the particle's trajectory is shown in Fig. A4 where the length of the string segment of QP is $s = L - \pi R/2$.

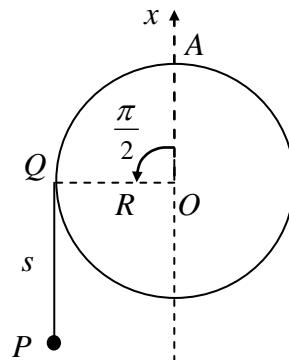


Figure A4

From Fig. A4 or Eq. (A6), the minimum potential energy is then

$$U_m = U(\pi/2) = -mg[R + L - (\pi R/2)] \quad (\text{A7})$$

Initially, the total mechanical energy E is 0. Since E is conserved, the speed v_m of the particle at the lowest point of its trajectory must satisfy

$$E = 0 = \frac{1}{2}mv_m^2 + U_m \quad (\text{A8})$$

From Eqs. (A7) and (A8), we obtain

$$v_m = \sqrt{-2U_m / m} = \sqrt{2g[R + (L - \pi R / 2)]} \quad (\text{A9})$$

Part B

(h) From Eq. (A6), the total mechanical energy of the particle may be written as

$$E = 0 = \frac{1}{2}mv^2 + U(\theta) = \frac{1}{2}mv^2 - mg[R(1 - \cos \theta) + s \sin \theta] \quad (\text{B1})$$

From Eq. (A4), the speed v is equal to $s\dot{\theta}$. Therefore, Eq. (B1) implies

$$v^2 = (s\dot{\theta})^2 = 2g[R(1 - \cos \theta) + s \sin \theta] \quad (\text{B2})$$

Let T be the tension in the string. Then, as Fig. B1 shows, the \hat{t} -component of the net force on the particle is $-T + mg \sin \theta$. From Eq. (A5), the tangential acceleration of the particle is $(-s\dot{\theta}^2)$. Thus, by Newton's second law, we have

$$m(-s\dot{\theta}^2) = -T + mg \sin \theta \quad (\text{B3})$$

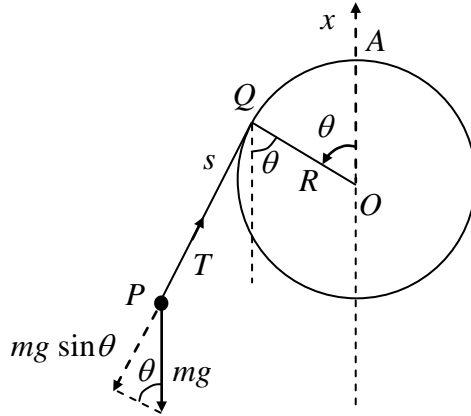
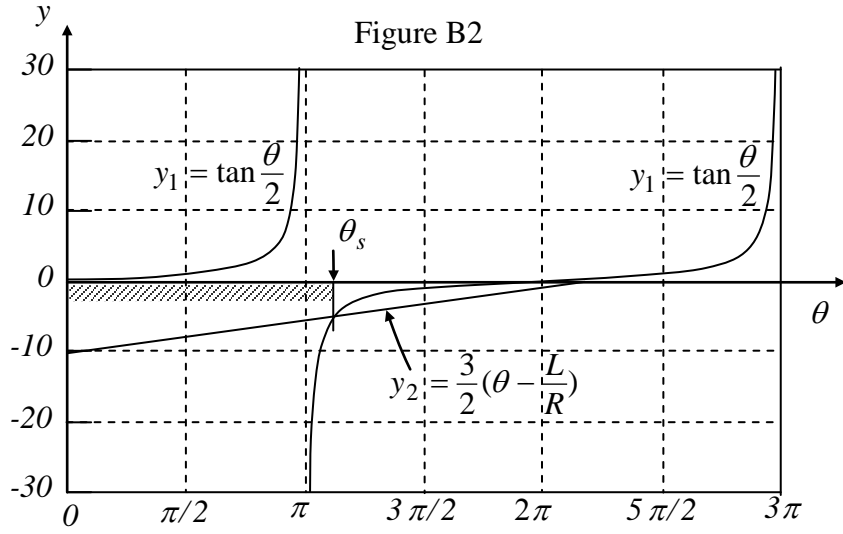


Figure B1

According to the last two equations, the tension may be expressed as

$$\begin{aligned} T &= m(s\dot{\theta}^2 + g \sin \theta) = \frac{mg}{s}[2R(1 - \cos \theta) + 3s \sin \theta] \\ &= \frac{2mgR}{s}\left[\tan \frac{\theta}{2} - \frac{3}{2}\left(\theta - \frac{L}{R}\right)\right](\sin \theta) \\ &= \frac{2mgR}{s}(y_1 - y_2)(\sin \theta) \end{aligned} \quad (\text{B4})$$

The functions $y_1 = \tan(\theta/2)$ and $y_2 = 3(\theta - L/R)/2$ are plotted in Fig B2.



From Eq. (B4) and Fig. B2, we obtain the result shown in Table B1. The angle at which $y_2 = y_1$ is called θ_s ($\pi < \theta_s < 2\pi$) and is given by

$$\frac{3}{2}(\theta_s - \frac{L}{R}) = \tan \frac{\theta_s}{2} \quad (\text{B5})$$

or, equivalently, by

$$\frac{L}{R} = \theta_s - \frac{2}{3} \tan \frac{\theta_s}{2} \quad (\text{B6})$$

Since the ratio L/R is known to be given by

$$\frac{L}{R} = \frac{9\pi}{8} + \frac{2}{3} \cot \frac{\pi}{16} = (\pi + \frac{\pi}{8}) - \frac{2}{3} \tan \frac{1}{2}(\pi + \frac{\pi}{8}) \quad (\text{B7})$$

one can readily see from the last two equations that $\theta_s = 9\pi/8$.

Table B1

	$(y_1 - y_2)$	$\sin \theta$	tension T
$0 < \theta < \pi$	positive	positive	positive
$\theta = \pi$	$+\infty$	0	positive
$\pi < \theta < \theta_s$	negative	negative	positive
$\theta = \theta_s$	zero	negative	zero
$\theta_s < \theta < 2\pi$	positive	negative	negative

Table B1 shows that the tension T must be positive (or the string must be taut and straight) in the angular range $0 < \theta < \theta_s$. Once θ reaches θ_s , the tension T becomes zero and the part of the string not in contact with the rod will not be straight afterwards. The shortest possible value s_{\min} for the length s of the line segment QP therefore occurs at $\theta = \theta_s$ and is given by

$$s_{\min} = L - R\theta_s = R\left(\frac{9\pi}{8} + \frac{2}{3}\cot\frac{\pi}{16} - \frac{9\pi}{8}\right) = \frac{2R}{3}\cot\frac{\pi}{16} = 3.352R \quad (\text{B8})$$

When $\theta = \theta_s$, we have $T = 0$ and Eqs. (B2) and (B3) then leads to $v_s^2 = -gs_{\min} \sin \theta_s$.

Hence the speed v_s is

$$\begin{aligned} v_s &= \sqrt{-gs_{\min} \sin \theta_s} = \sqrt{\frac{2gR}{3}\cot\frac{\pi}{16}\sin\frac{\pi}{8}} = \sqrt{\frac{4gR}{3}}\cos\frac{\pi}{16} \\ &= 1.133\sqrt{gR} \end{aligned} \quad (\text{B9})$$

- (i) When $\theta \geq \theta_s$, the particle moves like a projectile under gravity. As shown in Fig. B3, it is projected with an initial speed v_s from the position $P = (x_s, y_s)$ in a direction making an angle $\phi = (3\pi/2 - \theta_s)$ with the y -axis.

The speed v_H of the particle at the highest point of its parabolic trajectory is equal to the y -component of its initial velocity when projected. Thus,

$$v_H = v_s \sin(\theta_s - \pi) = \sqrt{\frac{4gR}{3}}\cos\frac{\pi}{16}\sin\frac{\pi}{8} = 0.4334\sqrt{gR} \quad (\text{B10})$$

The horizontal distance H traveled by the particle from point P to the point of maximum height is

$$H = \frac{v_s^2 \sin 2(\theta_s - \pi)}{2g} = \frac{v_s^2}{2g} \sin \frac{9\pi}{4} = 0.4535R \quad (\text{B11})$$

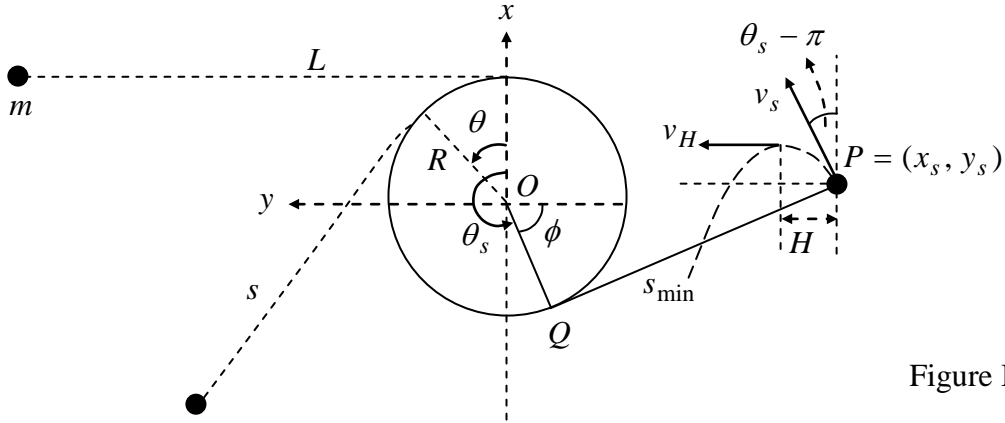


Figure B3

The coordinates of the particle when $\theta = \theta_s$ are given by

$$x_s = R \cos \theta_s - s_{\min} \sin \theta_s = -R \cos \frac{\pi}{8} + s_{\min} \sin \frac{\pi}{8} = 0.358R \quad (\text{B12})$$

$$y_s = R \sin \theta_s + s_{\min} \cos \theta_s = -R \sin \frac{\pi}{8} - s_{\min} \cos \frac{\pi}{8} = -3.478R \quad (\text{B13})$$

Evidently, we have $|y_s| > (R + H)$. Therefore the particle can indeed reach its maximum height without striking the surface of the rod.

Part C

(j) Assume the weight is initially lower than O by h as shown in Fig. C1.

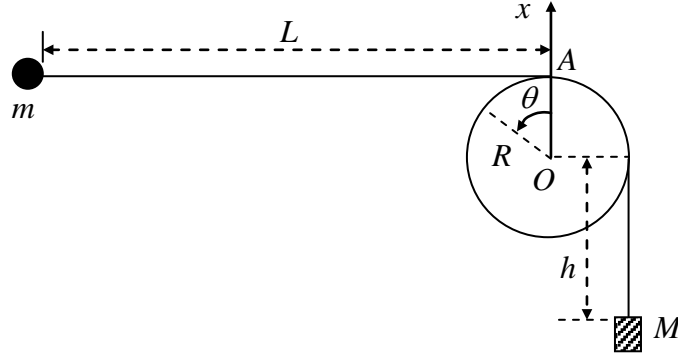


Figure C1

When the weight has fallen a distance D and stopped, the law of conservation of total mechanical energy as applied to the particle-weight pair as a system leads to

$$-Mgh = E' - Mg(h + D) \quad (\text{C1})$$

where E' is the *total mechanical energy of the particle* when the weight has stopped. It follows

$$E' = MgD \quad (\text{C2})$$

Let A be the total length of the string. Then, its value at $\theta = 0$ must be the same as at any other angular displacement θ . Thus we must have

$$A = L + \frac{\pi}{2}R + h = s + R\left(\theta + \frac{\pi}{2}\right) + (h + D) \quad (\text{C3})$$

Noting that $D = \alpha L$ and introducing $\ell = L - D$, we may write

$$\ell = L - D = (1 - \alpha)L \quad (\text{C4})$$

From the last two equations, we obtain

$$s = L - D - R\theta = \ell - R\theta \quad (\text{C5})$$

After the weight has stopped, the total mechanical energy of the particle must be conserved. According to Eq. (C2), we now have, instead of Eq. (B1), the following equation:

$$E' = MgD = \frac{1}{2}mv^2 - mg\left[R(1 - \cos\theta) + s \sin\theta\right] \quad (\text{C6})$$

The square of the particle's speed is accordingly given by

$$v^2 = (s\dot{\theta})^2 = \frac{2MgD}{m} + 2gR\left[(1 - \cos\theta) + \frac{s}{R} \sin\theta\right] \quad (\text{C7})$$

Since Eq. (B3) still applies, the tension T of the string is given by

$$-T + mg \sin\theta = m(-s\dot{\theta}^2) \quad (\text{C8})$$

From the last two equations, it follows

$$\begin{aligned}
T &= m(s\dot{\theta}^2 + g \sin \theta) \\
&= \frac{mg}{s} \left[\frac{2M}{m} D + 2R(1 - \cos \theta) + 3s \sin \theta \right] \\
&= \frac{2mgR}{s} \left[\frac{MD}{mR} + (1 - \cos \theta) + \frac{3}{2} \left(\frac{\ell}{R} - \theta \right) \sin \theta \right]
\end{aligned} \tag{C9}$$

where Eq. (C5) has been used to obtain the last equality.

We now introduce the function

$$f(\theta) = 1 - \cos \theta + \frac{3}{2} \left(\frac{\ell}{R} - \theta \right) \sin \theta \tag{C10}$$

From the fact $\ell = (L - D) \gg R$, we may write

$$f(\theta) \approx 1 + \frac{3}{2} \frac{\ell}{R} \sin \theta - \cos \theta = 1 + A \sin(\theta - \phi) \tag{C11}$$

where we have introduced

$$A = \sqrt{1 + \left(\frac{3}{2} \frac{\ell}{R} \right)^2}, \quad \phi = \tan^{-1} \left(\frac{2R}{3\ell} \right) \tag{C12}$$

From Eq. (C11), the minimum value of $f(\theta)$ is seen to be given by

$$f_{\min} = 1 - A = 1 - \sqrt{1 + \left(\frac{3}{2} \frac{\ell}{R} \right)^2} \tag{C13}$$

Since the tension T remains nonnegative as the particle swings around the rod, we have from Eq. (C9) the inequality

$$\frac{MD}{mR} + f_{\min} = \frac{M(L - \ell)}{mR} + 1 - \sqrt{1 + \left(\frac{3\ell}{2R} \right)^2} \geq 0 \tag{C14}$$

or

$$\left(\frac{ML}{mR} \right) + 1 \geq \left(\frac{M\ell}{mR} \right) + \sqrt{1 + \left(\frac{3\ell}{2R} \right)^2} \approx \left(\frac{M\ell}{mR} \right) + \left(\frac{3\ell}{2R} \right) \tag{C15}$$

From Eq. (C4), Eq. (C15) may be written as

$$\left(\frac{ML}{mR} \right) + 1 \geq \left(\frac{ML}{mR} + \frac{3L}{2R} \right) (1 - \alpha) \tag{C16}$$

Neglecting terms of the order (R/L) or higher, the last inequality leads to

$$\alpha \geq 1 - \frac{\left(\frac{ML}{mR} \right) + 1}{\left(\frac{ML}{mR} + \frac{3L}{2R} \right)} = \frac{\frac{3L}{2R} - 1}{\frac{ML}{mR} + \frac{3L}{2R}} = \frac{1 - \frac{2R}{3L}}{\frac{2M}{3m} + 1} \approx \frac{1}{1 + \frac{2M}{3m}} \tag{C17}$$

The critical value for the ratio D/L is therefore

$$\alpha_c = \frac{1}{1 + \frac{2M}{3m}} \tag{C18}$$

Marking Scheme

Theoretical Question 1 A Swing with a Falling Weight

Total Scores	Sub Scores	Marking Scheme for Answers to the Problem
Part A 4.3 pts.	(a) 0.5	Relation between $\dot{\theta}$ and \dot{s} . ($\dot{s} = -R\dot{\theta}$) <ul style="list-style-type: none"> ➤ 0.2 for $\dot{\theta} \propto \dot{s}$. ➤ 0.3 for proportionality constant ($-R$).
	(b) 0.5	Velocity of Q relative to O . ($\vec{v}_Q = R\dot{\theta}\hat{t}$) <ul style="list-style-type: none"> ➤ 0.2 for magnitude $R\dot{\theta}$. ➤ 0.3 for direction \hat{t}.
	(c) 0.7	Particle's velocity at P relative to Q . ($\vec{v}' = -s\dot{\theta}\hat{r} + \dot{s}\hat{t}$) <ul style="list-style-type: none"> ➤ 0.2+0.1 for magnitude and direction of \hat{r}-component. ➤ 0.3+0.1 for magnitude and direction of \hat{t}-component.
	(d) 0.7	Particle's velocity at P relative to O . ($\vec{v} = \vec{v}' + \vec{v}_Q = -s\dot{\theta}\hat{r}$) <ul style="list-style-type: none"> ➤ 0.3 for vector addition of \vec{v}' and \vec{v}_Q. ➤ 0.2+0.2 for magnitude and direction of \vec{v}.
	(e) 0.7	\hat{t} -component of particle's acceleration at P . <ul style="list-style-type: none"> ➤ 0.3 for relating \vec{a} or $\vec{a} \cdot \hat{t}$ to the velocity in a way that implies $\vec{a} \cdot \hat{t} = v^2/s$. ➤ 0.4 for $\vec{a} \cdot \hat{t} = -s\dot{\theta}^2$ (0.1 for minus sign.)
	(f) 0.5	Potential energy U . <ul style="list-style-type: none"> ➤ 0.2 for formula $U = -mgh$. ➤ 0.3 for $h = R(1 - \cos\theta) + s \sin\theta$ or U as a function of θ, s, and R.
	(g) 0.7	Speed at lowest point v_m . <ul style="list-style-type: none"> ➤ 0.2 for lowest point at $\theta = \pi/2$ or U equals minimum U_m. ➤ 0.2 for total mechanical energy $E = mv_m^2/2 + U_m = 0$. ➤ 0.3 for $v_m = \sqrt{-2U_m/m} = \sqrt{2g[R + (L - \pi R/2)]}$.
Part B 4.3 pts.	(h) 2.4	Particle's speed v_s when \overline{QP} is shortest. <ul style="list-style-type: none"> ➤ 0.4 for tension T becomes zero when \overline{QP} is shortest. ➤ 0.3 for equation of motion $-T + mg \sin\theta = m(-s\dot{\theta}^2)$. ➤ 0.3 for $E = 0 = m(s\dot{\theta})^2/2 - mg[R(1 - \cos\theta) + s \sin\theta]$. ➤ 0.4 for $\frac{3}{2}(\theta_s - \frac{L}{R}) = \tan \frac{\theta_s}{2}$. ➤ 0.5 for $\theta_s = 9\pi/8$. ➤ 0.3+0.2 for $v_s = \sqrt{4gR/3 \cos \pi/16} = 1.133\sqrt{gR}$

	(i) 1.9	<p>The speed v_H of the particle at its highest point.</p> <ul style="list-style-type: none"> ➤ 0.4 for particle undergoes projectile motion when $\theta \geq \theta_s$. ➤ 0.3 for angle of projection $\phi = (3\pi/2 - \theta_s)$. ➤ 0.3 for v_H is the y-component of its velocity at $\theta = \theta_s$. ➤ 0.4 for noting particle does not strike the surface of the rod. ➤ 0.3+0.2 for $v_H = \sqrt{4gR/3} \cos(\pi/16) \sin(\pi/8) = 0.4334\sqrt{gR}.$
Part C 3.4 pts	(j) 3.4	<p>The critical value α_c of the ratio D/L.</p> <ul style="list-style-type: none"> ➤ 0.4 for particle's energy $E' = MgD$ when the weight has stopped. ➤ 0.3 for $s = L - D - R\theta$. ➤ 0.3 for $E' = MgD = mv^2/2 - mg[R(1 - \cos\theta) + s \sin\theta]$. ➤ 0.3 for $-T + mg \sin\theta = m(-s\dot{\theta}^2)$. ➤ 0.3 for concluding T must not be negative. ➤ 0.6 for an inequality leading to the determination of the range of D/L. ➤ 0.6 for solving the inequality to give the range of $\alpha = D/L$. ➤ 0.6 for $\alpha_c = (1 + 2M/3m)$.

Solution to Theoretical Question 2

A Piezoelectric Crystal Resonator under an Alternating Voltage

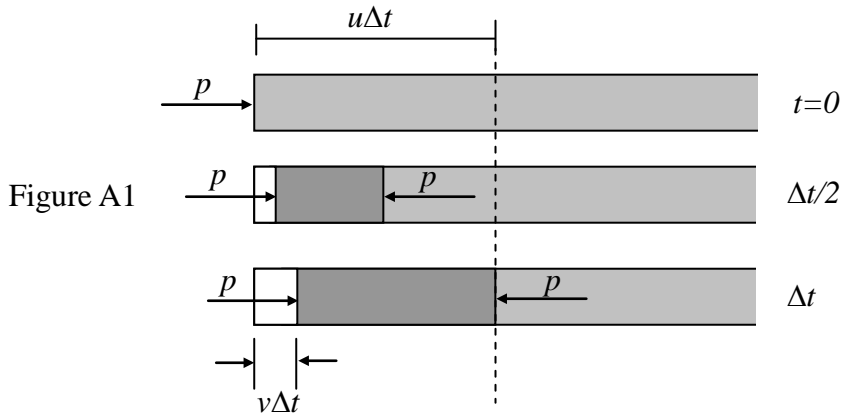
Part A

- (a) Refer to Figure A1. The left face of the rod moves a distance $v\Delta t$ while the pressure wave travels a distance $u\Delta t$ with $u = \sqrt{Y/\rho}$. The strain at the left face is

$$S = \frac{\Delta\ell}{\ell} = \frac{-v\Delta t}{u\Delta t} = \frac{-v}{u} \quad (\text{A1a})$$

From Hooke's law, the pressure at the left face is

$$p = -YS = Y\frac{v}{u} = \rho uv \quad (\text{A1b})$$



- (b) The velocity v is related to the displacement ξ as in a simple harmonic motion (or a uniform circular motion, as shown in Figure A2) of angular frequency $\omega = ku$. Therefore, if $\xi(x,t) = \xi_0 \sin k(x-ut)$, then

$$v(x,t) = -ku\xi_0 \cos k(x-ut). \quad (\text{A2})$$

The strain and pressure are related to velocity as in Problem (a). Hence,

$$S(x,t) = -v(x,t)/u = k\xi_0 \cos k(x-ut) \quad (\text{A3})$$

$$\begin{aligned} p(x,t) &= \rho uv(x,t) = -k\rho u^2 \xi_0 \cos k(x-ut) \\ &= -YS(x,t) = -kY\xi_0 \cos k(x-ut) \end{aligned} \quad (\text{A4})$$

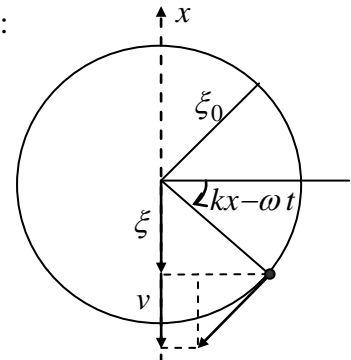
Alternatively, the answers may be obtained by differentiations:

$$v(x,t) = \frac{\Delta\xi}{\Delta t} = -ku\xi_0 \cos k(x-ut),$$

$$S(x,t) = \frac{\Delta\xi}{\Delta x} = k\xi_0 \cos k(x-ut),$$

$$p(x,t) = -Y \frac{\Delta\xi}{\Delta x} = -kY\xi_0 \cos k(x-ut).$$

Figure A2



Part B

- (c) Since the angular frequency ω and speed of propagation u are given, the wavelength is given by $\lambda = 2\pi/k$ with $k = \omega/u$. The spatial variation of the displacement ξ is therefore described by

$$g(x) = B_1 \sin k\left(x - \frac{b}{2}\right) + B_2 \cos k\left(x - \frac{b}{2}\right) \quad (\text{B1})$$

Since the centers of the electrodes are assumed to be stationary, $g(b/2) = 0$. This leads to $B_2 = 0$. Given that the maximum of $g(x)$ is 1, we have $B_1 = \pm 1$ and

$$g(x) = \pm \sin \frac{\omega}{u}\left(x - \frac{b}{2}\right) \quad (\text{B2})$$

Thus, the displacement is

$$\xi(x, t) = \pm 2\xi_0 \sin \frac{\omega}{u}\left(x - \frac{b}{2}\right) \cos \omega t \quad (\text{B3})$$

- (d) Since the pressure p (or stress T) must vanish at the end faces of the quartz slab (i.e., $x = 0$ and $x = b$), the answer to this problem can be obtained, by analogy, from the resonant frequencies of sound waves in an open pipe of length b . However, given that the centers of the electrodes are stationary, all even harmonics of the fundamental tone must be excluded because they have antinodes, rather than nodes, of displacement at the bisection plane of the slab.

Since the fundamental tone has a wavelength $\lambda = 2b$, the fundamental frequency is given by $f_1 = u/(2b)$. The speed of propagation u is given by

$$u = \sqrt{\frac{Y}{\rho}} = \sqrt{\frac{7.87 \times 10^{10}}{2.65 \times 10^3}} = 5.45 \times 10^3 \text{ m/s} \quad (\text{B4})$$

and, given that $b = 1.00 \times 10^{-2}$ m, the two lowest standing wave frequencies are

$$f_1 = \frac{u}{2b} = 273 \text{ (kHz)}, \quad f_3 = 3f_1 = \frac{3u}{2b} = 818 \text{ (kHz)} \quad (\text{B5})$$

[Alternative solution to Problems (c) and (d)]:

A longitudinal standing wave in the quartz slab has a displacement node at $x = b/2$. It may be regarded as consisting of two waves traveling in opposite directions. Thus, its displacement and velocity must have the following form

$$\begin{aligned} \xi(x, t) &= \xi_m \left[\sin k\left(x - \frac{b}{2} - ut\right) + \sin k\left(x - \frac{b}{2} + ut\right) \right] \\ &= 2\xi_m \sin k\left(x - \frac{b}{2}\right) \cos \omega t \end{aligned} \quad (\text{B6})$$

$$\begin{aligned} v(x, t) &= -ku\xi_m \left[\cos k\left(x - \frac{b}{2} - ut\right) - \cos k\left(x - \frac{b}{2} + ut\right) \right] \\ &= -2\omega\xi_m \sin k\left(x - \frac{b}{2}\right) \sin \omega t \end{aligned} \quad (\text{B7})$$

where $\omega = ku$ and the first and second factors in the square brackets represent waves

traveling along the $+x$ and $-x$ directions, respectively. Note that Eq. (B6) is identical to Eq. (B3) if we set $\xi_m = \pm\xi_0$.

For a wave traveling along the $-x$ direction, the velocity v must be replaced by $-v$ in Eqs. (A1a) and (A1b) so that we have

$$S = \frac{-v}{u} \quad \text{and} \quad p = \rho uv \quad (\text{waves traveling along } +x) \quad (\text{B8})$$

$$S = \frac{v}{u} \quad \text{and} \quad p = -\rho uv \quad (\text{waves traveling along } -x) \quad (\text{B9})$$

As in Problem (b), the strain and pressure are therefore given by

$$\begin{aligned} S(x,t) &= -k\xi_m \left[-\cos k \left(x - \frac{b}{2} - ut \right) - \cos k \left(x - \frac{b}{2} + ut \right) \right] \\ &= 2k\xi_m \cos k \left(x - \frac{b}{2} \right) \cos \omega t \end{aligned} \quad (\text{B10})$$

$$\begin{aligned} p(x,t) &= -\rho u \omega \xi_m \left[\cos k \left(x - \frac{b}{2} - ut \right) + \cos k \left(x - \frac{b}{2} + ut \right) \right] \\ &= -2\rho u \omega \xi_m \cos k \left(x - \frac{b}{2} \right) \cos \omega t \end{aligned} \quad (\text{B11})$$

Note that v , S , and p may also be obtained by differentiating ξ as in Problem (b).

The stress T or pressure p must be zero at both ends ($x = 0$ and $x = b$) of the slab at all times because they are free. From Eq. (B11), this is possible only if $\cos(kb/2) = 0$ or

$$kb = \frac{\omega}{u} b = \frac{2\pi f}{\lambda f} b = n\pi, \quad n = 1, 3, 5, \dots \quad (\text{B12})$$

In terms of wavelength λ , Eq. (B12) may be written as

$$\lambda = \frac{2b}{n}, \quad n = 1, 3, 5, \dots \quad (\text{B13})$$

The frequency is given by

$$f = \frac{u}{\lambda} = \frac{nu}{2b} = \frac{n}{2b} \sqrt{\frac{Y}{\rho}}, \quad n = 1, 3, 5, \dots \quad (\text{B14})$$

This is identical with the results given in Eqs. (B4) and (B5).

(e) From Eqs. (5a) and (5b) in the Question, the piezoelectric effect leads to the equations

$$T = Y(S - d_p E) \quad (\text{B15})$$

$$\sigma = Yd_p S + \varepsilon_T \left(1 - Y \frac{d_p^2}{\varepsilon_T} \right) E \quad (\text{B16})$$

Because $x = b/2$ must be a node of displacement for any longitudinal standing wave in the slab, the displacement ξ and strain S must have the form given in Eqs. (B6) and (B10), i.e., with $\omega = ku$,

$$\xi(x,t) = \xi_m \sin k \left(x - \frac{b}{2} \right) \cos(\omega t + \phi) \quad (\text{B17})$$

$$S(x,t) = k\xi_m \cos k\left(x - \frac{b}{2}\right) \cos(\omega t + \phi) \quad (\text{B18})$$

where a phase constant ϕ is now included in the time-dependent factors.

By assumption, the electric field E between the electrodes is uniform and depends only on time:

$$E(x,t) = \frac{V(t)}{h} = \frac{V_m \cos \omega t}{h} \quad (\text{B19})$$

Substituting Eqs. (B18) and (B19) into Eq. (B15), we have

$$T = Y \left[k\xi_m \cos k\left(x - \frac{b}{2}\right) \cos(\omega t + \phi) - \frac{d_p}{h} V_m \cos \omega t \right] \quad (\text{B20})$$

The stress T must be zero at both ends ($x = 0$ and $x = b$) of the slab at all times because they are free. This is possible only if $\phi = 0$ and

$$k\xi_m \cos \frac{kb}{2} = d_p \frac{V_m}{h} \quad (\text{B21})$$

Since $\phi = 0$, Eqs. (B16), (B18), and (B19) imply that the surface charge density must have the same dependence on time t and may be expressed as

$$\sigma(x,t) = \sigma(x) \cos \omega t \quad (\text{B22})$$

with the dependence on x given by

$$\begin{aligned} \sigma(x) &= Y d_p k \xi_m \cos k\left(x - \frac{b}{2}\right) + \varepsilon_T \left(1 - Y \frac{d_p^2}{\varepsilon_T}\right) \frac{V_m}{h} \\ &= \left[Y \frac{d_p^2}{\cos \frac{kb}{2}} \cos k\left(x - \frac{b}{2}\right) + \varepsilon_T \left(1 - Y \frac{d_p^2}{\varepsilon_T}\right) \right] \frac{V_m}{h} \end{aligned} \quad (\text{B23})$$

- (f) At time t , the total surface charge $Q(t)$ on the lower electrode is obtained by integrating $\sigma(x,t)$ in Eq. (B22) over the surface of the electrode. The result is

$$\begin{aligned} \frac{Q(t)}{V(t)} &= \frac{1}{V(t)} \int_0^b \sigma(x,t) w dx = \frac{1}{V_m} \int_0^b \sigma(x) w dx \\ &= \frac{w}{h} \int_0^b \left[Y \frac{d_p^2}{\cos \frac{kb}{2}} \cos k\left(x - \frac{b}{2}\right) + \varepsilon_T \left(1 - Y \frac{d_p^2}{\varepsilon_T}\right) \right] dx \\ &= \left(\varepsilon_T \frac{bw}{h} \right) \left[Y \frac{d_p^2}{\varepsilon_T} \left(\frac{2}{kb} \tan \frac{kb}{2} \right) + \left(1 - Y \frac{d_p^2}{\varepsilon_T}\right) \right] \\ &= C_0 \left[\alpha^2 \left(\frac{2}{kb} \tan \frac{kb}{2} \right) + (1 - \alpha^2) \right] \end{aligned} \quad (\text{B24})$$

where

$$C_0 = \varepsilon_T \frac{bw}{h}, \quad \alpha^2 = Y \frac{d_p^2}{\varepsilon_T} = \frac{(2.25)^2 \times 10^{-2}}{1.27 \times 4.06} = 9.82 \times 10^{-3} \quad (\text{B25})$$

(The constant α is called the *electromechanical coupling coefficient*.)

Note: The result $C_0 = \varepsilon_T bw/h$ can readily be seen by considering the static limit $k = 0$ of Eq. (5) in the Question. Since $\tan x \approx x$ when $x \ll 1$, we have

$$\lim_{k \rightarrow 0} Q(t)/V(t) \approx C_0[\alpha^2 + (1 - \alpha^2)] = C_0 \quad (\text{B26})$$

Evidently, the constant C_0 is the capacitance of the parallel-plate capacitor formed by the electrodes (of area bw) with the quartz slab (of thickness h and permittivity ε_T) serving as the dielectric medium. It is therefore given by $\varepsilon_T bw/h$.

Marking Scheme

Theoretical Question 2

A Piezoelectric Crystal Resonator under an Alternating Voltage

Total Scores	Sub Scores	Marking Scheme for Answers to the Problem
Part A 4.0 pts.	(a) 1.6	<p>The strain S and pressure p on the left face.</p> <ul style="list-style-type: none"> ➤ 0.4 for $\Delta \ell = v\Delta t$ and $\ell = u\Delta t$. ➤ 0.4 for $S = -v/u$. (0.1 for sign) ➤ 0.4 for relating p to S as $p = -YS$. (0.1 for sign) ➤ 0.4 for $p = \rho uv$. (0.1 for sign)
	(b) 2.4	<p>The velocity $v(x, t)$, strain $S(x, t)$, and pressure $p(x, t)$.</p> <ul style="list-style-type: none"> ➤ 0.3×3 sinusoidal variation with correct phase constant. (0.2 for phase constant.) ➤ 0.3×3 for amplitude. ➤ 0.2×3 for dependence on x and t as $(kx - kt)$.
Part B 6.0 pts	(c) 1.2	<p>The function $g(x)$ for a standing wave of angular frequency ω.</p> <ul style="list-style-type: none"> ➤ 0.4 for $g(b/2) = 0$. ➤ 0.3+0.1 for $B_1 = \pm 1$ (0.1 for both signs) ➤ 0.4 for $B_2 = 0$
	(d) 1.2	<p>The two lowest standing wave frequencies.</p> <ul style="list-style-type: none"> ➤ 0.2 for wavelength of fundamental tone $\lambda = 2b$. ➤ 0.2 for excluding even harmonics. ➤ (0.3+0.1) for $f_1 = u/2b = 273$ kHz. (0.1 for value) ➤ (0.3+0.1) for $f_3 = 3u/2b = 818$ kHz. (0.1 for value)
	(e) 2.2	<p>The surface charge density σ as a function of x and t.</p> <ul style="list-style-type: none"> ➤ 0.1×2 for ξ and S, each a separable function of x and t. ➤ 0.1×2 for ξ and S, each depends on time as $\cos \omega t$ with $\phi = 0$. ➤ 0.3 for spatial part $\xi(x) = \xi_m \sin k(x - b/2)$. ➤ 0.3 for spatial part $S(x) = k\xi_m \cos k(x - b/2)$. ➤ 0.3 for $T(x) = [k\xi_m \cos k(x - b/2) - d_p V_m / h]Y$. ➤ 0.3 for $k\xi_m \cos(kb/2) = d_p V_m / h$. ➤ 0.6 for D_1 (0.3) and D_2 (0.3) in $\sigma(x)$.
	(f) 1.4	<p>The constants C_0 and α^2.</p> <ul style="list-style-type: none"> ➤ 0.2 for relation between σ and Q as $Q(t) = \left(\int_0^b \sigma(x) w dx \right) \cos \omega t.$ ➤ 0.3 for noting $Q(t)/V(t) \approx C_0$ as $k \rightarrow 0$. ➤ 0.4 for $C_0 = \epsilon_T bw / h$. ➤ 0.4+0.1 for $\alpha^2 = Yd_p^2 / \epsilon_T = 9.82 \times 10^{-3}$. (0.1 for value)

Solution to Theoretical Question 3

Part A

Neutrino Mass and Neutron Decay

(a) Let $(c^2E_e, c\vec{q}_e)$, $(c^2E_p, c\vec{q}_p)$, and $(c^2E_\nu, c\vec{q}_\nu)$ be the energy-momentum 4-vectors of the electron, the proton, and the anti-neutrino, respectively, in the rest frame of the neutron. Notice that $E_e, E_p, E_\nu, \vec{q}_e, \vec{q}_p, \vec{q}_\nu$ are all in units of mass. The proton and the anti-neutrino may be considered as forming a system of total rest mass M_c , total energy c^2E_c , and total momentum $c\vec{q}_c$. Thus, we have

$$E_c = E_p + E_\nu, \quad \vec{q}_c = \vec{q}_p + \vec{q}_\nu, \quad M_c^2 = E_c^2 - q_c^2 \quad (\text{A1})$$

Note that the magnitude of the vector \vec{q}_c is denoted as q_c . The same convention also applies to all other vectors.

Since energy and momentum are conserved in the neutron decay, we have

$$E_c + E_e = m_n \quad (\text{A2})$$

$$\vec{q}_c = -\vec{q}_e \quad (\text{A3})$$

When squared, the last equation leads to the following equality

$$q_c^2 = q_e^2 = E_e^2 - m_e^2 \quad (\text{A4})$$

From Eq. (A4) and the third equality of Eq. (A1), we obtain

$$E_c^2 - M_c^2 = E_e^2 - m_e^2 \quad (\text{A5})$$

With its second and third terms moved to the other side of the equality, Eq. (A5) may be divided by Eq. (A2) to give

$$E_c - E_e = \frac{1}{m_n}(M_c^2 - m_e^2) \quad (\text{A6})$$

As a system of coupled linear equations, Eqs. (A2) and (A6) may be solved to give

$$E_c = \frac{1}{2m_n}(m_n^2 - m_e^2 + M_c^2) \quad (\text{A7})$$

$$E_e = \frac{1}{2m_n}(m_n^2 + m_e^2 - M_c^2) \quad (\text{A8})$$

Using Eq. (A8), the last equality in Eq. (A4) may be rewritten as

$$\begin{aligned} q_e &= \frac{1}{2m_n} \sqrt{(m_n^2 + m_e^2 - M_c^2)^2 - (2m_n m_e)^2} \\ &= \frac{1}{2m_n} \sqrt{(m_n + m_e + M_c)(m_n + m_e - M_c)(m_n - m_e + M_c)(m_n - m_e - M_c)} \end{aligned} \quad (\text{A9})$$

Eq. (A8) shows that a maximum of E_e corresponds to a minimum of M_c^2 . Now the rest mass M_c is the total energy of the proton and anti-neutrino pair in their center of mass (or momentum) frame so that it achieves the minimum

$$(M_c)_{\min} = M = m_p + m_\nu \quad (\text{A10})$$

when the proton and the anti-neutrino are both at rest in the center of mass frame. Hence, from Eqs. (A8) and (A10), the maximum energy of the electron $E = c^2 E_e$ is

$$E_{\max} = \frac{c^2}{2m_n} \left[m_n^2 + m_e^2 - (m_p + m_\nu)^2 \right] \approx 1.292569 \text{ MeV} \approx 1.29 \text{ MeV} \quad (\text{A11})$$

When Eq. (A10) holds, the proton and the anti-neutrino move with the same velocity v_m of the center of mass and we have

$$\frac{v_m}{c} = \left(\frac{q_\nu}{E_\nu} \right)_{E=E_{\max}} = \left(\frac{q_p}{E_p} \right)_{E=E_{\max}} = \left(\frac{q_c}{E_c} \right)_{E=E_{\max}} = \left(\frac{q_e}{E_c} \right)_{M_c=m_p+m_\nu} \quad (\text{A12})$$

where the last equality follows from Eq. (A3). By Eqs. (A7) and (A9), the last expression in Eq. (A12) may be used to obtain the speed of the anti-neutrino when $E = E_{\max}$. Thus, with $M = m_p + m_\nu$, we have

$$\begin{aligned} \frac{v_m}{c} &= \frac{\sqrt{(m_n + m_e + M)(m_n + m_e - M)(m_n - m_e + M)(m_n - m_e - M)}}{m_n^2 - m_e^2 + M^2} \\ &\approx 0.00126538 \approx 0.00127 \end{aligned} \quad (\text{A13})$$

[Alternative Solution]

Assume that, in the rest frame of the neutron, the electron comes out with momentum $c\vec{q}_e$ and energy $c^2 E_e$, the proton with $c\vec{q}_p$ and $c^2 E_p$, and the anti-neutrino with $c\vec{q}_\nu$ and $c^2 E_\nu$. With the magnitude of vector \vec{q}_α denoted by the symbol q_α , we have

$$E_p^2 = m_p^2 + q_p^2, \quad E_\nu^2 = m_\nu^2 + q_\nu^2, \quad E_e^2 = m_e^2 + q_e^2 \quad (\text{1A})$$

Conservation of energy and momentum in the neutron decay leads to

$$E_p + E_\nu = m_n - E_e \quad (\text{2A})$$

$$\vec{q}_p + \vec{q}_\nu = -\vec{q}_e \quad (\text{3A})$$

When squared, the last two equations lead to

$$E_p^2 + E_\nu^2 + 2E_p E_\nu = (m_n - E_e)^2 \quad (\text{4A})$$

$$q_p^2 + q_\nu^2 + 2\vec{q}_p \cdot \vec{q}_\nu = q_e^2 = E_e^2 - m_e^2 \quad (\text{5A})$$

Subtracting Eq. (5A) from Eq. (4A) and making use of Eq. (1A) then gives

$$m_p^2 + m_\nu^2 + 2(E_p E_\nu - \vec{q}_p \cdot \vec{q}_\nu) = m_n^2 + m_e^2 - 2m_n E_e \quad (\text{6A})$$

or, equivalently,

$$2m_n E_e = m_n^2 + m_e^2 - m_p^2 - m_\nu^2 - 2(E_p E_\nu - \bar{q}_p \cdot \bar{q}_\nu) \quad (7A)$$

If θ is the angle between \bar{q}_p and \bar{q}_ν , we have $\bar{q}_p \cdot \bar{q}_\nu = q_p q_\nu \cos \theta \leq q_p q_\nu$ so that Eq. (7A) leads to the relation

$$2m_n E_e \leq m_n^2 + m_e^2 - m_p^2 - m_\nu^2 - 2(E_p E_\nu - q_p q_\nu) \quad (8A)$$

Note that the equality in Eq. (8A) holds only if $\theta = 0$, i.e., the energy of the electron $c^2 E_e$ takes on its maximum value only when the anti-neutrino and the proton *move in the same direction*.

Let the speeds of the proton and the anti-neutrino in the rest frame of the neutron be $c\beta_p$ and $c\beta_\nu$, respectively. We then have $q_p = \beta_p E_p$ and $q_\nu = \beta_\nu E_\nu$. As shown in Fig. A1, we introduce the angle ϕ_ν ($0 \leq \phi_\nu < \pi/2$) for the antineutrino by

$$q_\nu = m_\nu \tan \phi_\nu, \quad E_\nu = \sqrt{m_\nu^2 + q_\nu^2} = m_\nu \sec \phi_\nu, \quad \beta_\nu = q_\nu / E_\nu = \sin \phi_\nu \quad (9A)$$

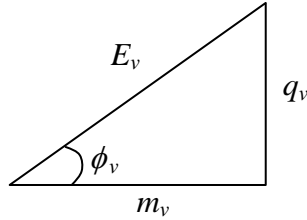


Figure A1

Similarly, for the proton, we write, with $0 \leq \phi_p < \pi/2$,

$$q_p = m_p \tan \phi_p, \quad E_p = \sqrt{m_p^2 + q_p^2} = m_p \sec \phi_p, \quad \beta_p = q_p / E_p = \sin \phi_p \quad (10A)$$

Eq. (8A) may then be expressed as

$$2m_n E_e \leq m_n^2 + m_e^2 - m_p^2 - m_\nu^2 - 2m_p m_\nu \left(\frac{1 - \sin \phi_p \sin \phi_\nu}{\cos \phi_p \cos \phi_\nu} \right) \quad (11A)$$

The factor in parentheses at the end of the last equation may be expressed as

$$\frac{1 - \sin \phi_p \sin \phi_\nu}{\cos \phi_p \cos \phi_\nu} = \frac{1 - \sin \phi_p \sin \phi_\nu - \cos \phi_p \cos \phi_\nu}{\cos \phi_p \cos \phi_\nu} + 1 = \frac{1 - \cos(\phi_p - \phi_\nu)}{\cos \phi_p \cos \phi_\nu} + 1 \geq 1 \quad (12A)$$

and clearly assumes its minimum possible value of 1 when $\phi_p = \phi_\nu$, i.e., when the anti-neutrino and the proton *move with the same velocity* so that $\beta_p = \beta_\nu$. Thus, it follows from Eq. (11A) that the maximum value of E_e is

$$\begin{aligned} (E_e)_{\max} &= \frac{1}{2m_n} (m_n^2 + m_e^2 - m_p^2 - m_\nu^2 - 2m_p m_\nu) \\ &= \frac{1}{2m_n} [m_n^2 + m_e^2 - (m_p + m_\nu)^2] \end{aligned} \quad (13A)$$

and the maximum energy of the electron $E = c^2 E_e$ is

$$E_{\max} = c^2 (E_e)_{\max} \approx 1.292569 \text{ MeV} \approx 1.29 \text{ MeV} \quad (14A)$$

When the anti-neutrino and the proton move with the same velocity, we have, from Eqs. (9A), (10A), (2A), (3A), and (1A), the result

$$\beta_v = \beta_p = \frac{q_p}{E_p} = \frac{q_v}{E_v} = \frac{q_p + q_v}{E_p + E_v} = \frac{q_e}{m_n - E_e} = \frac{\sqrt{E_e^2 - m_e^2}}{m_n - E_e} \quad (15A)$$

Substituting the result of Eq. (13A) into the last equation, the speed v_m of the anti-neutrino when the electron attains its maximum value E_{\max} is, with $M = m_p + m_v$, given by

$$\begin{aligned} \frac{v_m}{c} &= (\beta_v)_{\max E_e} = \frac{\sqrt{(E_e)_{\max}^2 - m_e^2}}{m_n - (E_e)_{\max}} = \frac{\sqrt{(m_n^2 + m_e^2 - M^2)^2 - 4m_n^2 m_e^2}}{2m_n^2 - (m_n^2 + m_e^2 - M^2)} \\ &= \frac{\sqrt{(m_n + m_e + M)(m_n + m_e - M)(m_n - m_e + M)(m_n - m_e - M)}}{m_n^2 - m_e^2 + M^2} \\ &\approx 0.00126538 \approx 0.00127 \end{aligned} \quad (16A)$$

Part B

Light Levitation

(b) Refer to Fig. B1. Refraction of light at the spherical surface obeys Snell's law and leads to

$$n \sin \theta_i = \sin \theta_t \quad (B1)$$

Neglecting terms of the order $(\delta/R)^3$ or higher in sine functions, Eq. (B1) becomes

$$n\theta_i \approx \theta_t \quad (B2)$$

For the triangle $\triangle FAC$ in Fig. B1, we have

$$\beta = \theta_t - \theta_i \approx n\theta_i - \theta_i = (n-1)\theta_i \quad (B3)$$

Let f_0 be the frequency of the incident light. If n_p is the number of photons incident on the plane surface per unit area per unit time, then the total number of photons incident on the plane surface per unit time is $n_p \pi \delta^2$. The total power P of photons incident on the plane surface is $(n_p \pi \delta^2)(hf_0)$, with h being Planck's constant. Hence,

$$n_p = \frac{P}{\pi \delta^2 h f_0} \quad (B4)$$

The number of photons incident on an annular disk of inner radius r and outer radius $r + dr$ on the plane surface per unit time is $n_p (2\pi r dr)$, where $r = R \tan \theta_i \approx R \theta_i$.

Therefore,

$$n_p (2\pi r dr) \approx n_p (2\pi R^2) \theta_i d\theta_i \quad (B5)$$

The z -component of the momentum carried away per unit time by these photons when

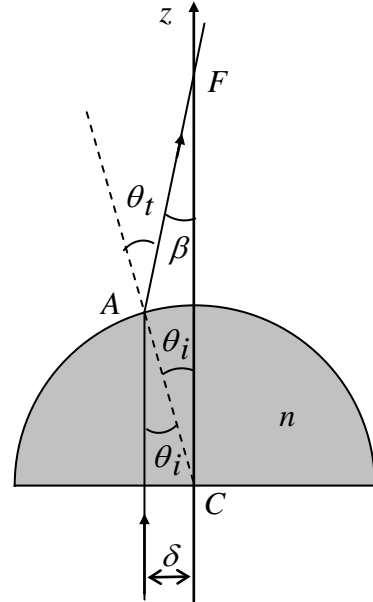


Fig. B1

refracted at the spherical surface is

$$\begin{aligned}
dF_z &= n_p \frac{hf_o}{c} (2\pi r dr) \cos \beta \approx n_p \frac{hf_o}{c} (2\pi R^2) \left(1 - \frac{\beta^2}{2}\right) \theta_i d\theta_i \\
&\approx n_p \frac{hf_o}{c} (2\pi R^2) \left[\theta_i - \frac{(n-1)^2}{2} \theta_i^3 \right] d\theta_i
\end{aligned} \tag{B6}$$

so that the z -component of the total momentum carried away per unit time is

$$\begin{aligned}
F_z &= 2\pi R^2 n_p \left(\frac{hf_o}{c} \right) \int_0^{\theta_{im}} \left[\theta_i - \frac{(n-1)^2}{2} \theta_i^3 \right] d\theta_i \\
&= \pi R^2 n_p \left(\frac{hf_o}{c} \right) \theta_{im}^2 \left[1 - \frac{(n-1)^2}{4} \theta_{im}^2 \right]
\end{aligned} \tag{B7}$$

where $\tan \theta_{im} = \frac{\delta}{R} \approx \theta_{im}$. Therefore, by the result of Eq. (B5), we have

$$F_z = \frac{\pi R^2 P}{\pi \delta^2 hf_o} \left(\frac{hf_o}{c} \right) \frac{\delta^2}{R^2} \left[1 - \frac{(n-1)^2 \delta^2}{4R^2} \right] = \frac{P}{c} \left[1 - \frac{(n-1)^2 \delta^2}{4R^2} \right] \tag{B8}$$

The force of optical levitation is equal to the sum of the z -components of the forces exerted by the incident and refracted lights on the glass hemisphere and is given by

$$\frac{P}{c} + (-F_z) = \frac{P}{c} - \frac{P}{c} \left[1 - \frac{(n-1)^2 \delta^2}{4R^2} \right] = \frac{(n-1)^2 \delta^2}{4R^2} \frac{P}{c} \tag{B9}$$

Equating this to the weight mg of the glass hemisphere, we obtain the minimum laser power required to levitate the hemisphere as

$$P = \frac{4mgcR^2}{(n-1)^2 \delta^2} \tag{B10}$$

Marking Scheme

Theoretical Question 3 Neutrino Mass and Neutron Decay

Total Scores	Sub Scores	Marking Scheme for Answers to the Problem
Part A 4.0 pts.	(a) 4.0	<p>The maximum energy of the electron and the corresponding speed of the anti-neutrino.</p> <ul style="list-style-type: none"> ➤ 0.5 use energy-momentum conservation and can convert it into equations. ➤ 0.5 obtain an expression for E_e that allows the determination of its maximum value. ➤ (0.5+0.2) for concluding that proton and anti-neutrino must move with the same velocity when E_e is maximum. (0.2 for the same direction) ➤ 0.6 for establishing the minimum value of $(E_p E_v - \vec{q}_p \cdot \vec{q}_v)$ to be $m_p m_v$ or a conclusion equivalent to it. ➤ (0.5+0.1) for expression and value of E_{\max}. ➤ 0.5 for concluding $\beta_v = \sqrt{E_e^2 - m_e^2} / (m_n - E_e)$. ➤ (0.5+0.1) for expression and value of v_m/c.

Light Levitation

Part B 4.0 pts	(b) 4.0	<p>Laser power needed to balance the weight of the glass hemisphere.</p> <ul style="list-style-type: none"> ➤ 0.3 for law of refraction $n \sin \theta_i = \sin \theta_t$. ➤ 0.3 for making the linear approximation $n \theta_i \approx \theta_t$. ➤ 0.4 for relation between angles of deviation and incidence. ➤ 0.3 for photon energy $\varepsilon = h\nu$. ➤ 0.3 for photon momentum $p = \varepsilon/c$. ➤ 0.3 for momentum of incident photons per unit time = P/c. ➤ 0.6 for momentum of photons refracted per unit time as a function of the angle of incidence. ➤ 0.4 for total momentum of photons refracted per unit time = $[1-(n-1)^2 \delta^2 / (4R^2)] P/c$. ➤ 0.4 for force of levitation = sum of forces exerted by incident and refracted photons. ➤ 0.4 for force of levitation = $(n-1)^2 \delta^2 P / (4cR^2)$. ➤ 0.3 for the needed laser power $P = 4mgcR^2 / (n-1)^2 \delta^2$.
-----------------------	----------------	---